



Apple subtraction!


Cross out the numbers of apples to be subtracted and write the answers on the line.




$5 - 2 = \underline{\quad}$




$4 - 3 = \underline{\quad}$




$5 - 1 = \underline{\quad}$



$3 - 2 = \underline{\quad}$



$4 - 2 = \underline{\quad}$



$6 - 3 = \underline{\quad}$